

Mathematics: applications and interpretation
Higher level
Paper 2

Tuesday 2 November 2021 (morning)

2 hours

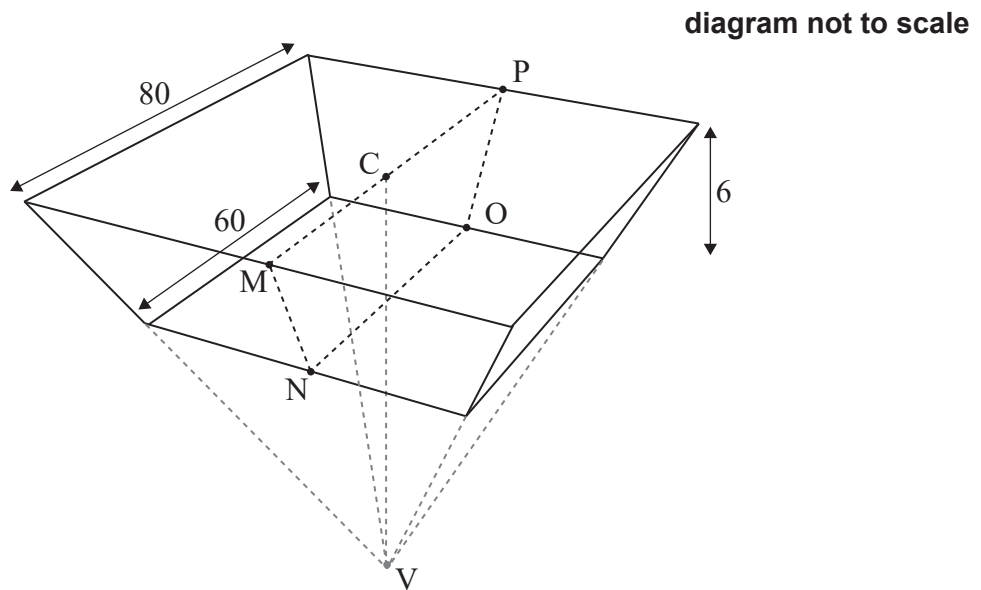
Instructions to candidates

- Do not open this examination paper until instructed to do so.
- A graphic display calculator is required for this paper.
- Answer all the questions in the answer booklet provided.
- Unless otherwise stated in the question, all numerical answers should be given exactly or correct to three significant figures.
- A clean copy of the **mathematics: applications and interpretation formula booklet** is required for this paper.
- The maximum mark for this examination paper is **[110 marks]**.

Answer **all** questions in the answer booklet provided. Please start each question on a new page. Full marks are not necessarily awarded for a correct answer with no working. Answers must be supported by working and/or explanations. Solutions found from a graphic display calculator should be supported by suitable working. For example, if graphs are used to find a solution, you should sketch these as part of your answer. Where an answer is incorrect, some marks may be given for a correct method, provided this is shown by written working. You are therefore advised to show all working.

1. [Maximum mark: 14]

A large water reservoir is built in the form of part of an upside-down right pyramid with a horizontal square base of length 80 metres. The point C is the centre of the square base and point V is the vertex of the pyramid.

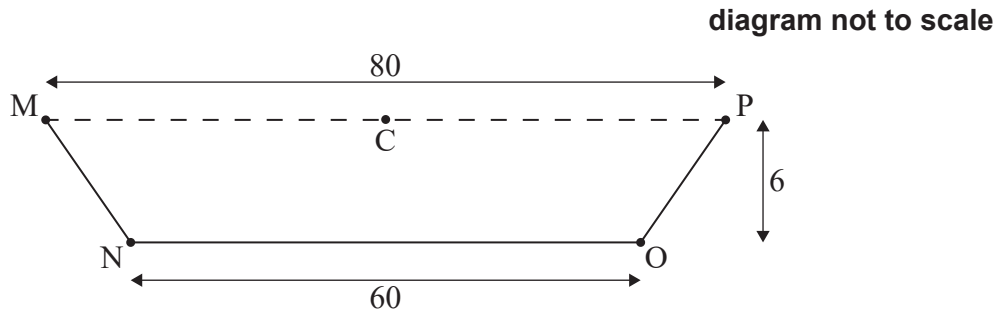


The bottom of the reservoir is a square of length 60 metres that is parallel to the base of the pyramid, such that the depth of the reservoir is 6 metres as shown in the diagram.

(This question continues on the following page)

(Question 1 continued)

The second diagram shows a vertical cross section, MNOPC, of the reservoir.



- (a) Find the angle of depression from M to N. [2]
- (b) (i) Find CV.
- (ii) Hence or otherwise, show that the volume of the reservoir is $29\,600\text{ m}^3$. [5]

Every day 80 m^3 of water from the reservoir is used for irrigation.

Joshua states that, if no other water enters or leaves the reservoir, then when it is full there is enough irrigation water for at least one year.

- (c) By finding an appropriate value, determine whether Joshua is correct. [2]

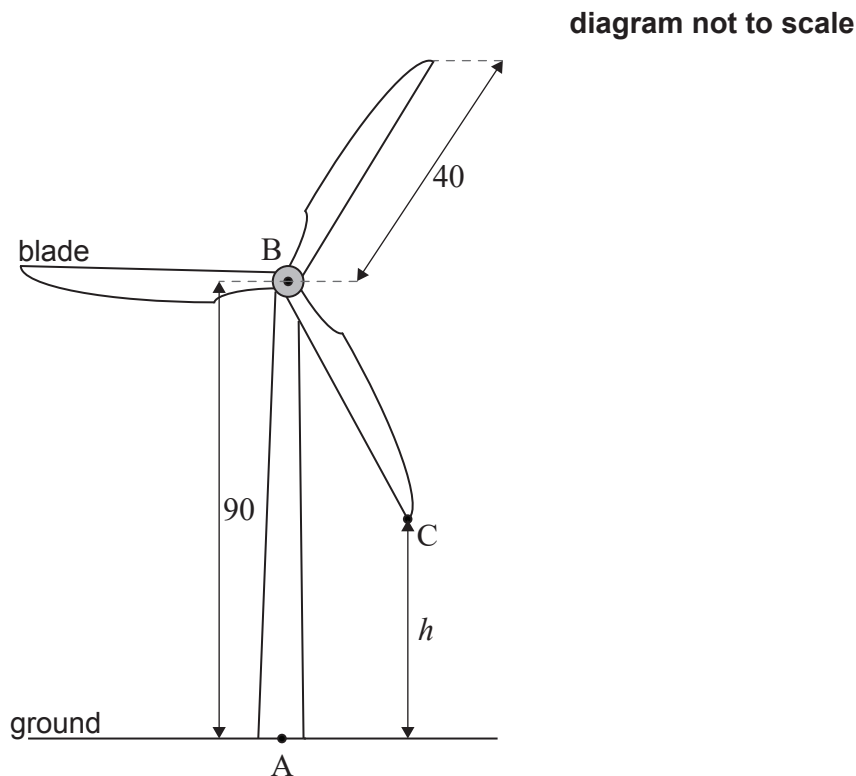
To avoid water leaking into the ground, the five interior sides of the reservoir have been painted with a watertight material.

- (d) Find the area that was painted. [5]

2. [Maximum mark: 20]

A wind turbine is designed so that the rotation of the blades generates electricity. The turbine is built on horizontal ground and is made up of a vertical tower and three blades.

The point A is on the base of the tower directly below point B at the top of the tower. The height of the tower, AB, is 90 m. The blades of the turbine are centred at B and are each of length 40 m. This is shown in the following diagram.



The end of one of the blades of the turbine is represented by point C on the diagram. Let h be the height of C above the ground, measured in metres, where h varies as the blade rotates.

- (a) Find the
- (i) maximum value of h .
 - (ii) minimum value of h . [2]

The blades of the turbine complete 12 rotations per minute under normal conditions, moving at a constant rate.

- (b) (i) Find the time, in seconds, it takes for the blade [BC] to make one complete rotation under these conditions.
- (ii) Calculate the angle, in degrees, that the blade [BC] turns through in one second. [3]

(This question continues on the following page)

(Question 2 continued)

The height, h , of point C can be modelled by the following function. Time, t , is measured from the instant when the blade [BC] first passes [AB] and is measured in seconds.

$$h(t) = 90 - 40 \cos(72t^\circ), \quad t \geq 0$$

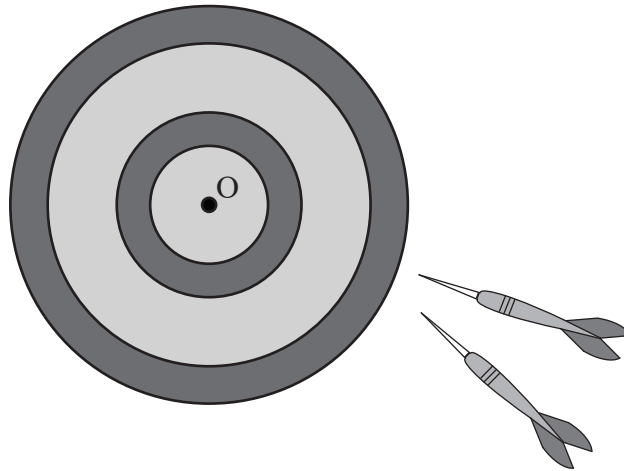
- (c) (i) Write down the amplitude of the function.
- (ii) Find the period of the function. [2]
- (d) Sketch the function $h(t)$ for $0 \leq t \leq 5$, clearly labelling the coordinates of the maximum and minimum points. [3]
- (e) (i) Find the height of C above the ground when $t = 2$.
- (ii) Find the time, in seconds, that point C is above a height of 100m, during each complete rotation. [5]

The wind speed increases and the blades rotate faster, but still at a constant rate.

- (f) Given that point C is now higher than 110m for 1 second during each complete rotation, find the time for one complete rotation. [5]

3. [Maximum mark: 16]

Arianne plays a game of darts.



The distance that her darts land from the centre, O, of the board can be modelled by a normal distribution with mean 10 cm and standard deviation 3 cm.

- (a) Find the probability that
 - (i) a dart lands less than 13 cm from O.
 - (ii) a dart lands more than 15 cm from O. [3]

Each of Arianne's throws is independent of her previous throws.

- (b) Find the probability that Arianne throws two consecutive darts that land more than 15 cm from O. [2]

In a competition a player has three darts to throw on each turn. A point is scored if a player throws **all** three darts to land within a central area around O. When Arianne throws a dart the probability that it lands within this area is 0.8143.

- (c) Find the probability that Arianne does **not** score a point on a turn of three darts. [2]

In the competition Arianne has ten turns, each with three darts.

- (d) (i) Find Arianne's expected score in the competition.
 - (ii) Find the probability that Arianne scores at least 5 points in the competition.
 - (iii) Find the probability that Arianne scores at least 5 points and less than 8 points.
 - (iv) Given that Arianne scores at least 5 points, find the probability that Arianne scores less than 8 points. [9]

4. [Maximum mark: 18]

A flying drone is programmed to complete a series of movements in a horizontal plane relative to an origin O and a set of x - y -axes.

In each case, the drone moves to a new position represented by the following transformations:

- a rotation anticlockwise of $\frac{\pi}{6}$ radians about O
- a reflection in the line $y = \frac{x}{\sqrt{3}}$.
- a rotation clockwise of $\frac{\pi}{3}$ radians about O .

All the movements are performed in the listed order.

- (a) (i) Write down each of the transformations in matrix form, clearly stating which matrix represents each transformation.
- (ii) Find a single matrix P that defines a transformation that represents the overall change in position.
- (iii) Find P^2 .
- (iv) Hence state what the value of P^2 indicates for the possible movement of the drone. [12]
- (b) Three drones are initially positioned at the points A , B and C . After performing the movements listed above, the drones are positioned at points A' , B' and C' respectively.
- Show that the area of triangle ABC is equal to the area of triangle $A'B'C'$. [2]
- (c) Find a single transformation that is equivalent to the three transformations represented by matrix P . [4]

5. [Maximum mark: 13]

(a) Let $z = 1 - i$.

(i) Plot the position of z on an Argand Diagram.

(ii) Express z in the form $z = ae^{ib}$, where $a, b \in \mathbb{R}$, giving the exact value of a and the exact value of b . [3]

(b) Let $w_1 = e^{ix}$ and $w_2 = e^{i(x-\frac{\pi}{2})}$, where $x \in \mathbb{R}$.

(i) Find $w_1 + w_2$ in the form $e^{ix}(c + id)$.

(ii) Hence find $\text{Re}(w_1 + w_2)$ in the form $A \cos(x - \alpha)$, where $A > 0$ and $0 < \alpha \leq \frac{\pi}{2}$. [6]

The current, I , in an AC circuit can be modelled by the equation $I = a \cos(bt - c)$ where b is the frequency and c is the phase shift.

Two AC voltage sources of the same frequency are independently connected to the same circuit. If connected to the circuit alone they generate currents I_A and I_B . The maximum value and the phase shift of each current is shown in the following table.

Current	Maximum value	Phase shift
I_A	12 amps	0
I_B	12 amps	$\frac{\pi}{2}$

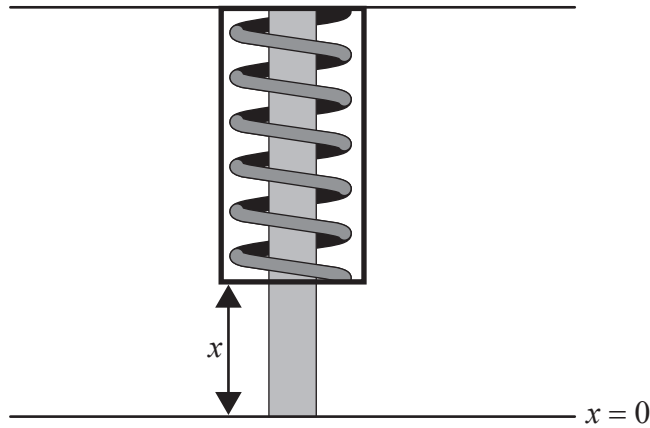
When the two voltage sources are connected to the circuit at the same time, the total current I_T can be expressed as $I_A + I_B$.

(c) (i) Find the maximum value of I_T .

(ii) Find the phase shift of I_T . [4]

6. [Maximum mark: 15]

A shock absorber on a car contains a spring surrounded by a fluid. When the car travels over uneven ground the spring is compressed and then returns to an equilibrium position.



The displacement, x , of the spring is measured, in centimetres, from the equilibrium position of $x = 0$. The value of x can be modelled by the following second order differential equation, where t is the time, measured in seconds, after the initial displacement.

$$\ddot{x} + 3\dot{x} + 1.25x = 0$$

(a) Given that $y = \dot{x}$, show that $\dot{y} = -1.25x - 3y$. [2]

The differential equation can be expressed in the form $\begin{pmatrix} \dot{x} \\ \dot{y} \end{pmatrix} = A \begin{pmatrix} x \\ y \end{pmatrix}$, where A is a 2×2 matrix.

(b) Write down the matrix A . [1]

(c) (i) Find the eigenvalues of matrix A .

(ii) Find the eigenvectors of matrix A . [6]

(d) Given that when $t = 0$ the shock absorber is displaced 8 cm and its velocity is zero, find an expression for x in terms of t . [6]

7. [Maximum mark: 14]

Loreto is a manager at the Da Vinci health centre. If the mean rate of patients arriving at the health centre exceeds 1.5 per minute then Loreto will employ extra staff. It is assumed that the number of patients arriving in any given time period follows a Poisson distribution.

Loreto performs a hypothesis test to determine whether she should employ extra staff. She finds that 320 patients arrived during a randomly selected 3-hour clinic.

(a) (i) Write down null and alternative hypotheses for Loreto’s test.

(ii) Using the data from Loreto’s sample, perform the hypothesis test at a 5% significance level to determine if Loreto should employ extra staff.

[7]

Loreto is also concerned about the average waiting time for patients to see a nurse. The health centre aims for at least 95% of patients to see a nurse in under 20 minutes.

Loreto assumes that the waiting times for patients are independent of each other and decides to perform a hypothesis test at a 10% significance level to determine whether the health centre is meeting its target.

Loreto surveys 150 patients and finds that 11 of them waited more than 20 minutes.

(b) (i) Write down null and alternative hypotheses for this test.

(ii) Perform the test, clearly stating the conclusion in context.

[7]

References: